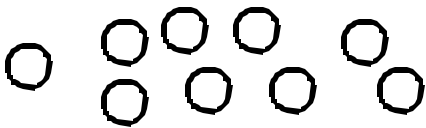
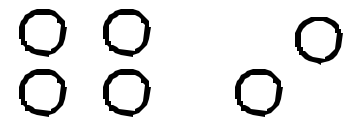
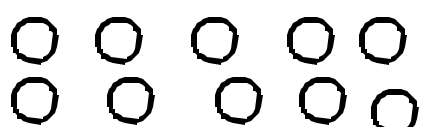


Name _____

Tell if each number is even or odd. Circle the correct answer.

<p style="text-align: center;">7</p> <p>even odd</p>	<p style="text-align: center;">2</p> <p>even odd</p>
<p style="text-align: center;">20</p> <p>even odd</p>	<p style="text-align: center;">15</p> <p>even odd</p>
<p style="text-align: center;"></p> <p>even odd</p>	<p style="text-align: center;"></p> <p>even odd</p>
<p style="text-align: center;">18</p> <p>even odd</p>	<p style="text-align: center;">100</p> <p>even odd</p>
<p style="text-align: center;">97</p> <p>even odd</p>	<p style="text-align: center;"></p> <p>even odd</p>